

Name: _____ Date: _____ Per: _____ Log#: _____

The Four Hemispheres

1. The equator divides the Earth into which two hemispheres? _____

2. The prime meridian helps to divide the Earth into which two hemispheres? _____

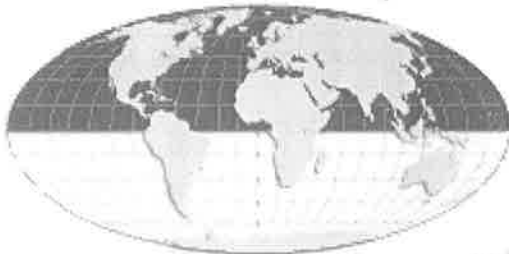
3. North America is part of which two hemispheres? _____
4. Is Australia part of the northern and western OR the southern and eastern hemispheres?

5. In which hemispheres is Asia located? _____
6. Does the equator cross the northern OR the southern part of South America? _____

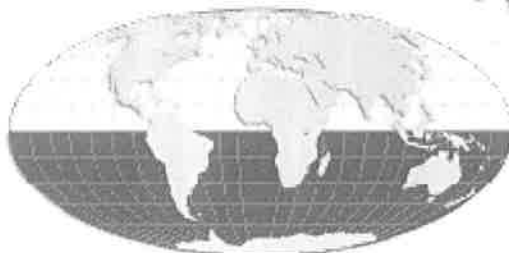
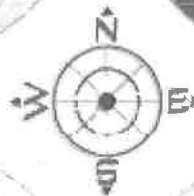
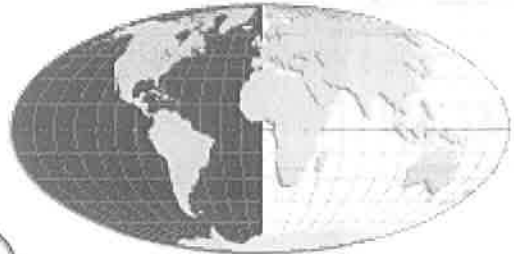
7. South America is located mostly in which two hemispheres? _____

8. What is the only hemisphere in which Antarctica has no land? _____
9. Africa has land in both the western and eastern hemispheres, yet Africa is considered part of the eastern hemisphere. Why do you think this is? _____

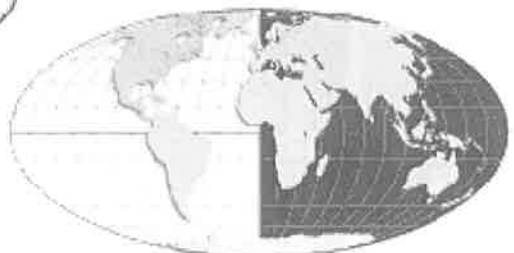
Northern Hemisphere



Western Hemisphere



Southern Hemisphere



Eastern Hemisphere

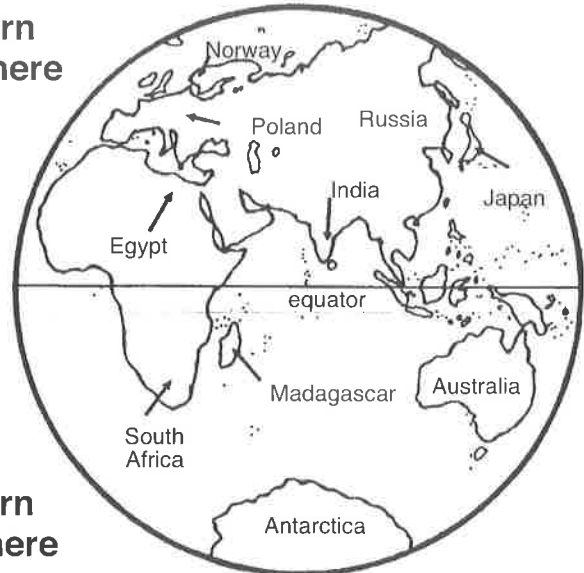
Where Is It?

Use the hemisphere maps on this page to help you locate the correct hemispheres for the places listed below.

Western Hemisphere



Eastern Hemisphere



Northern Hemisphere

Southern Hemisphere

Hemisphere Location Chart

Place	Hemisphere(Northern or Southern)	Hemisphere(Eastern or Western)
1. South Africa		
2. Norway		
3. Venezuela		
4. Canada		
5. Japan		
6. Mexico		
7. Russia		
8. Egypt		
9. United States		
10. Argentina		
11. Poland		
12. Greenland		
13. India		
14. Chile		
15. Madagascar		
16. Australia		